

No.13

3年組 番名前()

- ① 25 + 34 ② 10 + 58 ③ 43 + 98 ④ 6 + 47

	2	5
+	3	4
<hr/>		
	5	9

	1	0
+	5	8
<hr/>		
	6	8

	4	3
+	9	8
<hr/>		
1	4	1

		6
+	4	7
<hr/>		
	5	3

- ⑤ 68 - 23 ⑥ 96 - 92 ⑦ 64 - 37 ⑧ 106 - 49

	6	8
-	2	3
<hr/>		
	4	5

	9	6
-	9	2
<hr/>		
		4

	6	4
-	3	7
<hr/>		
	2	7

	1	0	6
-		4	9
<hr/>			
		5	7

⑨ 4 × 7 = 28

⑩ 8 × 6 = 48

⑪ 3 × 6 = 18

⑫ 9 × 4 = 36

⑬ 7 × 6 = 6 × 7

⑭ 2 × 7 = 7 × 2

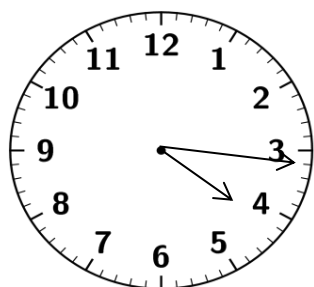
⑮ 3 × 4 = 3 × 3 + 3

⑯ 5 × 5 + 5 = 5 × 6

⑰ 7 × 6 = 7 × 7 - 7

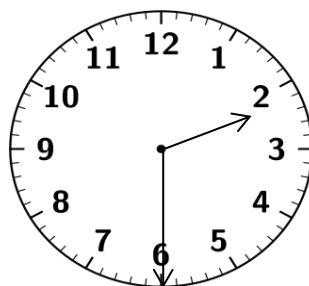
⑱ 8 × 4 = 8 × 5 - 8

つぎの時こくを読んだり 時こくのどけいはりを書いたりしなさい。

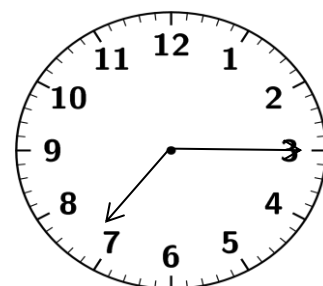


4時16分

2時30分



7時15分



No.14

3年組 番名前()

① $5 + 30$

		5
+	3	0
<hr/>		
	3	5

② $47 + 25$

	4	7
+	2	5
<hr/>		
	7	2

③ $56 + 68$

	5	6
+	6	8
<hr/>		
1	2	4

④ $546 + 84$

	5	4
+		8
<hr/>		
	6	2

⑤ $74 - 23$

	7	4
-	2	3
<hr/>		
	5	1

⑥ $81 - 53$

	8	1
-	5	3
<hr/>		
	2	8

⑦ $67 - 39$

	6	7
-	3	9
<hr/>		
	2	8

⑧ $104 - 77$

	1	0	4
-		7	7
<hr/>			
		2	7

⑧ $4 \times 7 = \boxed{28}$

⑨ $6 \times 9 = \boxed{54}$

⑩ $\boxed{8} \times 9 = 72$

⑪ $4 \times \boxed{8} = 32$

⑫ $8 \times \boxed{4} = 4 \times 8$

⑬ $6 \times 7 = 7 \times \boxed{6}$

⑭ $4 \times 8 = 4 \times 7 + \boxed{4}$

⑮ $8 \times 7 = 8 \times 6 + \boxed{8}$

⑯ $2 \times 5 = 2 \times 6 - \boxed{2}$

⑰ $5 \times 6 = 5 \times 7 - \boxed{5}$

に あう 数を 書きましよう。

① $1 \text{ m} = \boxed{100} \text{ cm}$

② $200 \text{ cm} = \boxed{2} \text{ m}$

③ $3 \text{ m } 65 \text{ cm} = \boxed{365} \text{ cm}$

④ $825 \text{ cm} = \boxed{8} \text{ m } \boxed{25} \text{ cm}$

No.15

3年組 番名前()

- ① $63 + 25$ ② $40 + 27$ ③ $69 + 96$ ④ $96 + 8$

	6	3
+	2	5
<hr/>		
	8	8

	4	0
+	2	7
<hr/>		
	6	7

	6	9
+	9	6
<hr/>		
1	6	5

	9	6
+		8
<hr/>		
1	0	4

- ⑤ $67 - 23$ ⑥ $55 - 52$ ⑦ $73 - 48$ ⑧ $219 - 57$

	6	7
-	2	3
<hr/>		
	4	4

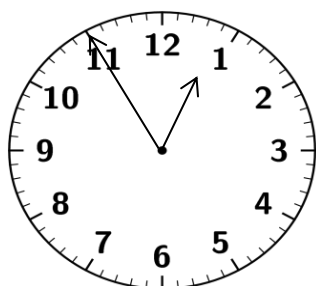
	5	5
-	5	2
<hr/>		
		3

	7	3
-	4	8
<hr/>		
	2	5

	2	1	9
-		5	7
<hr/>			
	1	6	2

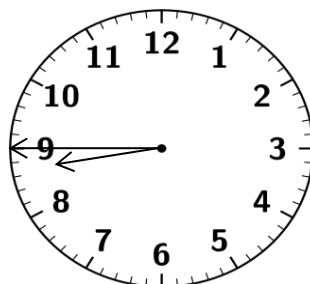
- ⑨ $6 \times 4 = 24$ ⑩ $8 \times 5 = 40$ ⑪ $6 \times 7 = 42$ ⑫ $6 \times 8 = 8 \times 6$
- ⑬ $8 \times 3 = 3 \times 8$ ⑭ $7 \times 4 = 7 \times 3 + 7$ ⑮ $5 \times 5 + 5 = 5 \times 6$
- ⑯ $2 \times 7 = 2 \times 8 - 2$ ⑰ $9 \times 3 = 9 \times 4 - 9$

つぎの時こくを読んだり 時こくのときのはりを 書いたりしなさい。

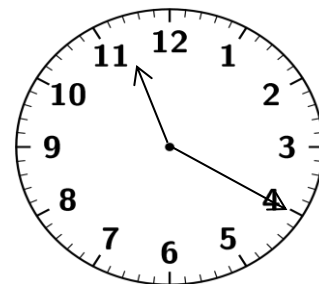


12時55分

8時45分



11時20分



No.16

3年組 番名前()

① $7 + 50$

		7
+	5	0
<hr/>		
	5	7

② $76 + 88$

	7	6
+	8	8
<hr/>		
1	6	4

③ $56 + 85$

	5	6
+	8	5
<hr/>		
1	4	1

④ $39 + 174$

		3	9
+	1	7	4
<hr/>			
	2	1	3

⑤ $69 - 41$

	6	9
-	4	1
<hr/>		
	2	8

⑥ $70 - 38$

	7	0
-	3	8
<hr/>		
	3	2

⑦ $45 - 29$

	4	5
-	2	9
<hr/>		
	1	6

⑧ $614 - 186$

	6	1	4
-	1	8	6
<hr/>			
	4	2	8

⑨ $7 \times 6 = \boxed{42}$

⑩ $6 \times 8 = \boxed{48}$

⑪ $\boxed{8} \times 3 = 24$

⑫ $5 \times \boxed{9} = 45$

⑬ $\boxed{4} \times 9 = 9 \times \boxed{4}$

⑭ $7 \times \boxed{9} = 9 \times 7$

⑮ $5 \times 6 = 5 \times 5 + \boxed{5}$

⑯ $4 \times 7 = 4 \times 6 + \boxed{4}$

⑰ $7 \times 6 = 7 \times 7 - \boxed{7}$

⑱ $3 \times 8 = 3 \times 9 - \boxed{3}$

に あう 数を 書きましよう。

① $100\text{cm} = \boxed{1}\text{m}$

② $5\text{m} = \boxed{500}\text{cm}$

③ $7\text{m}14\text{cm} = \boxed{714}\text{cm}$

④ $407\text{m} = \boxed{4}\text{m} \boxed{7}\text{cm}$

